















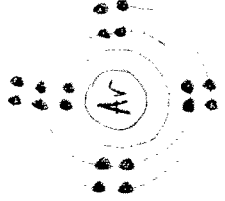

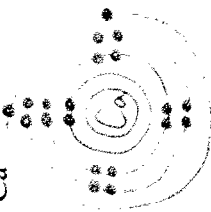


Draw the first 20 elements (identify the number or protons, neutrons, and electrons, and draw them in their correct locations)

H		Li		Be		B		C		N		O		F		He		
Na		Mg		Al		Si		P		S		Cl		Ar				
K		Ca																
Group/Family Alkali Metals	Number or valence electrons 1	Group/Family Alkaline Earth Metals	Number or valence electrons 2	Group/Family "Group 13"	Number or valence electrons 3	Group/Family "Group 14"	Number or valence electrons 4	"Group 15"	Number or valence electrons 5	Chalcogens	Number or valence electrons 6	Halogens	Number or valence electrons 7	Group/Family Noble Gases	Number or valence electrons 8 (except Helium)			